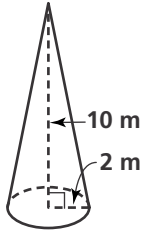


Practice 10-4

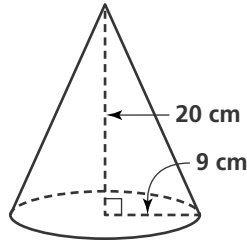
Surface Areas of Pyramids and Cones

Find the lateral area of each cone to the nearest whole number.

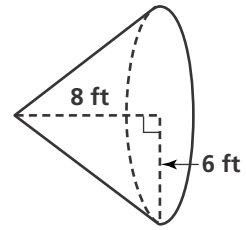
1.



2.

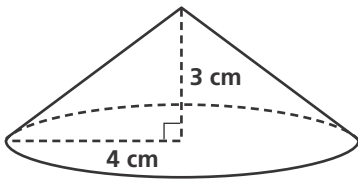


3.

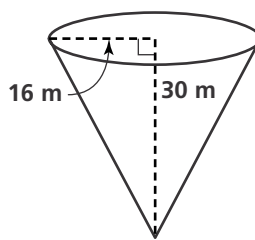


Find the surface area of each cone in terms of π .

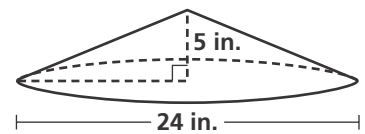
4.



5.

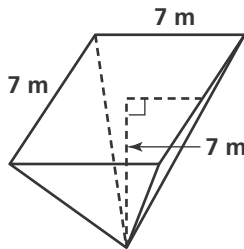


6.

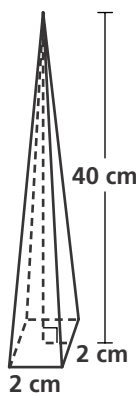


Find the lateral area of each regular pyramid to the nearest tenth.

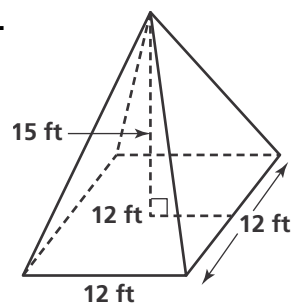
7.



8.

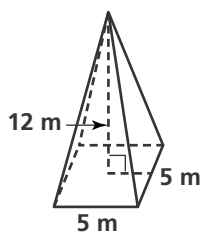


9.

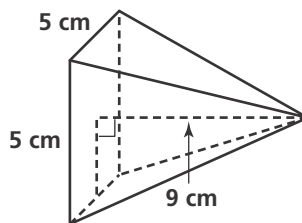


Find the surface area of each regular pyramid to the nearest tenth.

10.



11.



12.

